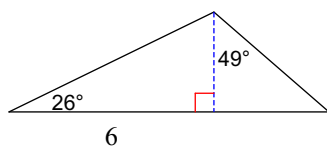
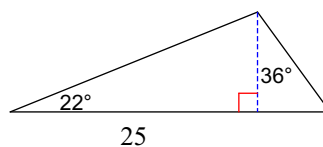


**Find the area of each triangle. Round intermediate values to the nearest tenth. Use the rounded values to calculate the next value. Round your final answer to the nearest tenth.**

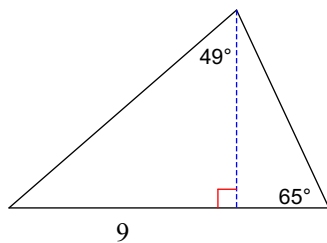
1)



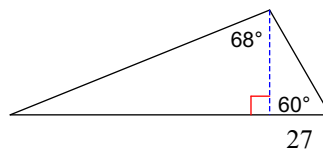
2)



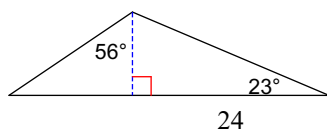
3)



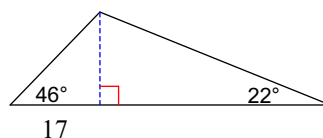
4)



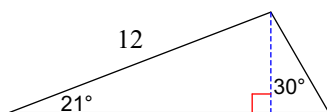
5)



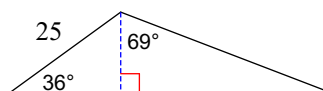
6)



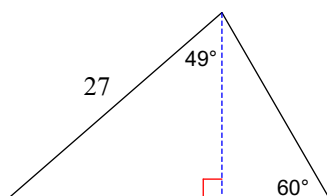
7)



8)



9)



10)

